

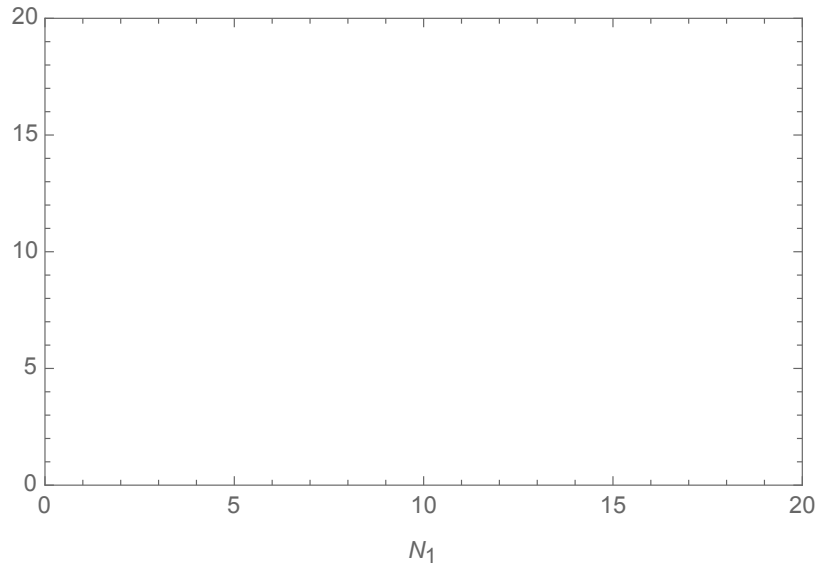
CLEARLY **Draw and Label** the isoclines and corresponding vector field for the following systems. **Label** where the isoclines intersect the x- and y-axes.  
(use a ruler and make sure the isoclines intersect with the axis at the correct places!)

1)

$$\frac{dN_1}{dt} = 2N_1 \left( 1 - \frac{N_1 + 0.5N_2}{10} \right)$$

$$\frac{dN_2}{dt} = 2N_2 \left( 1 - \frac{N_2 + 5N_1}{10} \right)$$

If a population starts at  $N_1 = 2$ ,  $N_2 = 3$ , where will it end up? Draw the trajectory.

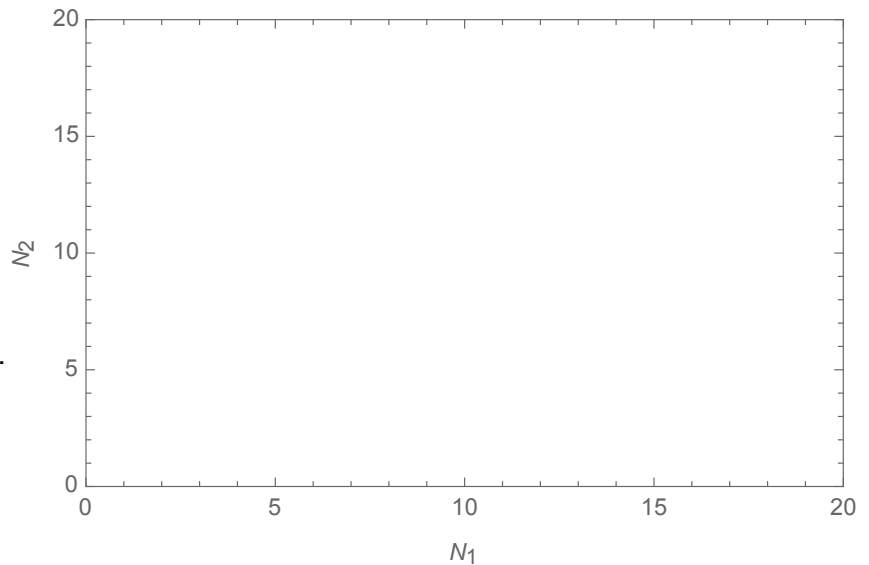


2)

$$\frac{dN_1}{dt} = 2N_1 \left( 1 - \frac{N_1 + 0.5N_2}{10} \right)$$

$$\frac{dN_2}{dt} = 2N_2 \left( 1 - \frac{N_2 + \frac{2}{3}N_1}{10} \right)$$

If a population starts at  $N_1 = 10$ ,  $N_2 = 5$ , where will it end up? Draw the trajectory.

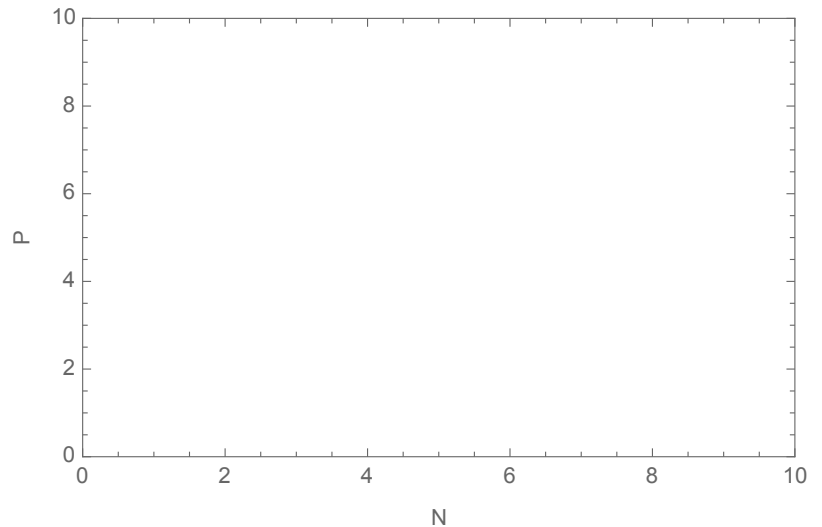


3) Assuming the growth rate of N is 2, the attack rate = 0.5, the conversion efficiency is 0.1, and the mortality rate is 0.2...

$$\frac{dN}{dt} = 2N - 0.5NP$$

$$\frac{dP}{dt} = 0.1 * 0.5 * NP - 0.2P$$

If a population starts at N=2, P=2, where will it end up? Draw the trajectory.



4) Given the following dynamics for a disease in a population.

$$\frac{dS}{dt} = -\beta \frac{IS}{N}$$

$$\frac{dI}{dt} = \beta \frac{IS}{N} - \gamma I$$

$$\frac{dR}{dt} = \gamma I$$

Assuming:  $\beta = 0.5$  and  $\gamma = 2$ , calculate  $R_0$ . What do you expect to occur?

Assuming:  $\beta = 0.8$  and  $\gamma = 0.5$ , calculate  $R_0$ . What do you expect to occur?